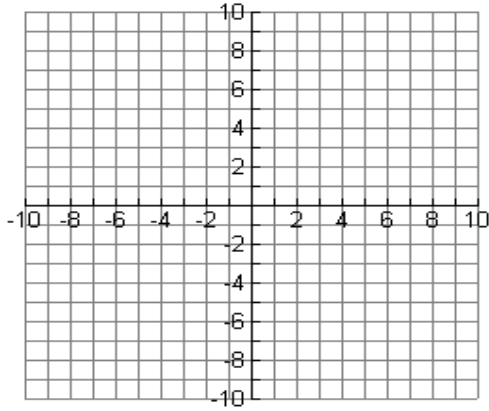


Name _____

Date _____

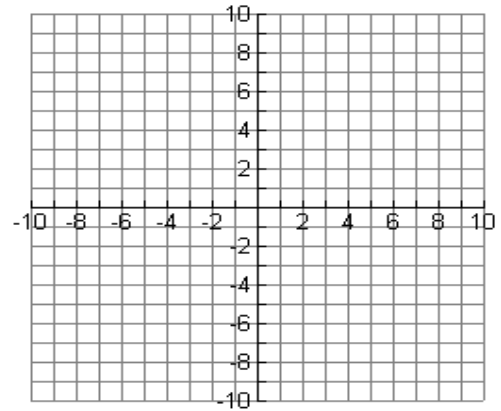
1. Graph $f(x) = \frac{5}{x+3}$



x – int _____ HA _____

y – int _____ VA _____

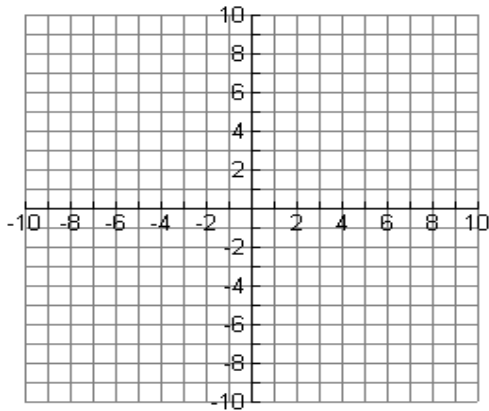
2. Graph $f(x) = \frac{2x-1}{x+3}$



x – int _____ HA _____

y – int _____ VA _____

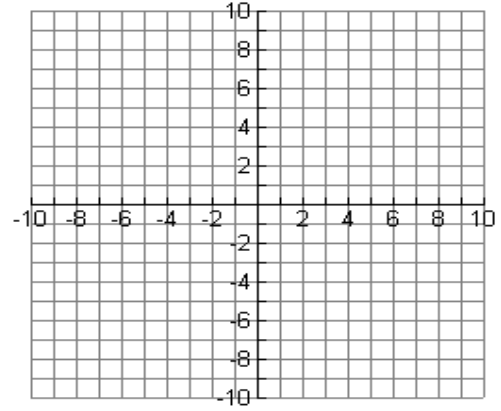
3. Graph $f(x) = \frac{2x^2 + 3x - 2}{x^2 - 9}$



x – int _____ HA _____

y – int _____ VA _____

4. Graph $f(x) = \frac{3-4x}{x-1}$



x – int _____ HA _____

y – int _____ VA _____